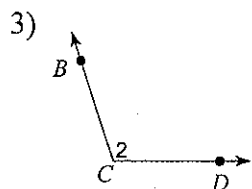
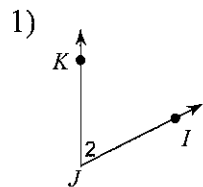


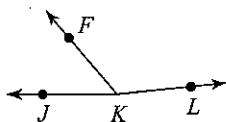
# Angle Addition HW

Date \_\_\_\_\_ Period \_\_\_\_\_

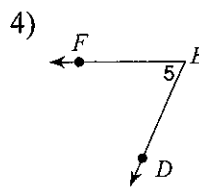
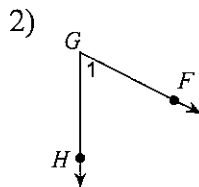
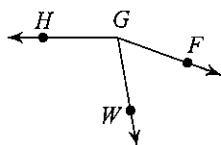
Name each angle in four ways.



- 5) Find  $m\angle FKL$  if  $m\angle JKL = 174^\circ$  and  $m\angle JKF = 50^\circ$ .



- 7)  $m\angle FGW = x + 67$ ,  $m\angle WGH = x + 107$ , and  $m\angle FGH = 160^\circ$ . Find  $m\angle WGH$ .



- 6)  $m\angle IRS = 150^\circ$  and  $m\angle QRI = 20^\circ$ . Find  $m\angle QRS$ .

